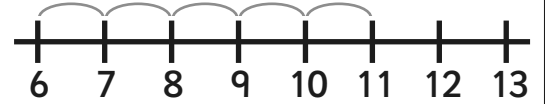


# Addition and Subtraction to 20 with a Number Line


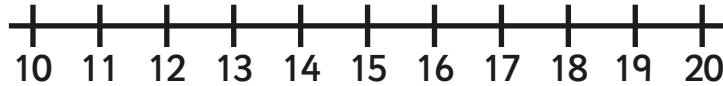
Example:

$$\underline{11} - 5 = \textcircled{6}$$



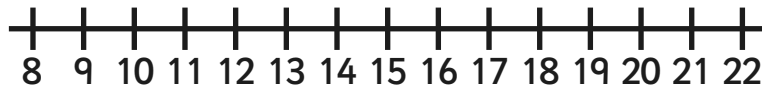
Can you work out the answer and draw a picture or write a sentence about it?  
The first one is done for you.

$$18 - 6 =$$

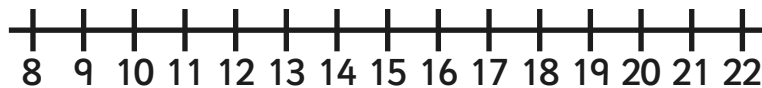


*My Dad buys 18 eggs but breaks 6 of them. How many eggs does he have left?*

$$8 + 12 =$$



$$11 + 9 =$$



$$17 - 8 =$$

